


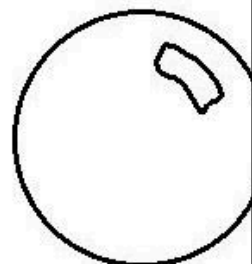
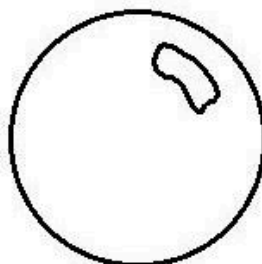
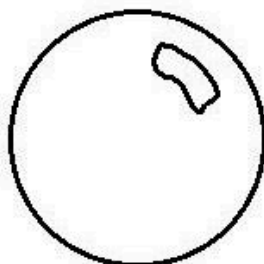
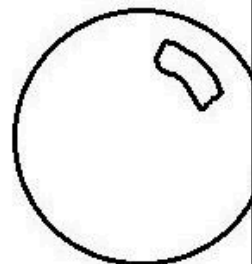
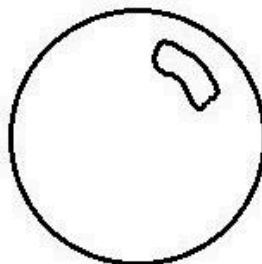
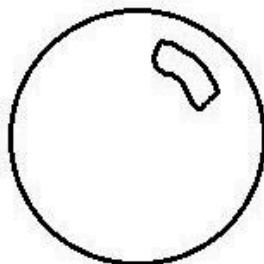
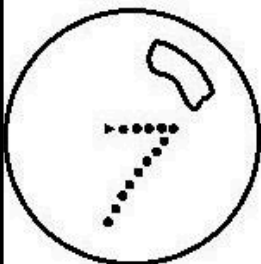
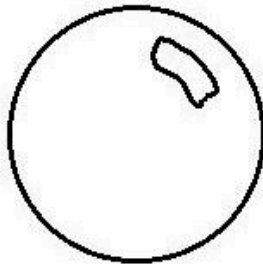
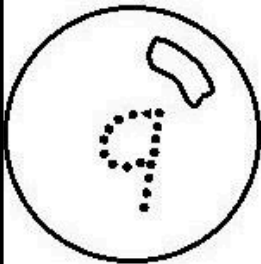
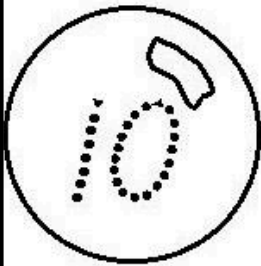


AIR FORCE SCHOOL
WESTERN AIR COMMAND

Name: _____

Class: _____

Count from 10
to 0 backwards.






AIR FORCE SCHOOL
WESTERN AIR COMMAND

Name: _____
Class: _____

Can you help Newton to fill in the missing numbers
by counting back in ones.



1)

10	9	8		6		4	3
----	---	---	--	---	--	---	---

2)

8		6	5	4		2	
---	--	---	---	---	--	---	--

3)

7	6		4		2		0
---	---	--	---	--	---	--	---

4)

	8	7		5		3	2
--	---	---	--	---	--	---	---

5)

10	9		7		5		3
----	---	--	---	--	---	--	---

6)

9		7	6		4		2
---	--	---	---	--	---	--	---



AIR FORCE SCHOOL
WESTERN AIR COMMAND

Name: _____
Class: _____

Q. Complete the following

